

ST. THOMAS SCHOOL, SAHIBABAD
CYCLE TEST-3(2024-25)
WORKSHEET
CLASS-1
MATHEMATICS

MARKS OBTAINED: _____MM:25

NAME: _____ SECTION: _____ ROLL No. _____ DATE: _____

Q1. Tick (✓) the correct option:





a) The number comes just before 65 is:

(A) 64 (B) 65 (C) 66 (D) 67 1





b) The number comes just after 59 is:

(A) 61 (B) 60 (C) 62 (D) 63 1

c) Tick the one which is shortest:

(A)  (B)  (C)  (D)  1

d) Tick the one which is thickest:

(A)  (B)  (C)  (D)  1

Q2. Fill in the blanks:

a) Number name of 69 is _____ . 1

b) One less than 35 is _____ . 1

c) Two more than 66 is _____ . 1

d) 7 tens + 0 ones = _____ . 1

Q3. Match the following:

Seventy-nine ___ 56 1

Fifty-six ___ 93 1

Ninety-three ___ 79 1

Q4. Complete the table:

a) $5 \times 5 =$ 1

b) $4 \times 7 =$ 1

c) $10 \times 6 =$ 1

Q5. Fill in the missing numbers:

- a) 50, _____, 48, 47, _____, 45, _____, 43, _____, 41 1
- b) 61, 62, _____, 64, 65, 66, _____, _____, 69 _____ 1
- c) 70, 69, 68, _____, 66, _____, 64, _____, _____, 61 1

Q6. Add:

2

(A)

T	O
5	8
+ 2	4

(B)

T	O
3	4
+ 0	7

Q7. Subtract:

2

(A)

T	O
5	1
- 1	5

(A)

T	O
6	0
- 0	5

Q8. Solve the following:

- a) In a school there are 56 students in class 1st and 45 students in class 2nd. How many Students are there in both the classes? 2

	T	O
Number of students in class 1 st =		
Number of students in class 2 nd =		
Total students =		

Answer - _____ students.

- b) In a box, there were 72 marbles. 28 marbles were sold. How many marbles were left? 2

	T	O
Total marbles =		
Number of marbles sold =		
Number of marbles left =		

Answer - _____ marbles.