

ST. THOMAS KINDERGARTEN, SAHIBABAD
MATHEMATICS PRACTICE SHEET
CYCLE-III (2024- 2025)
CLASS- NURSERY

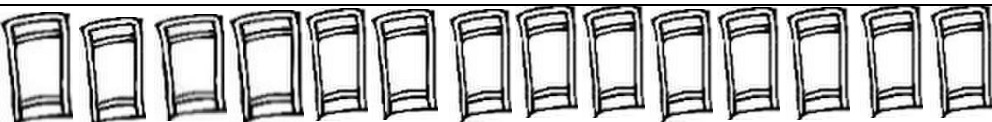




NAME: - _____

DATE: - _____


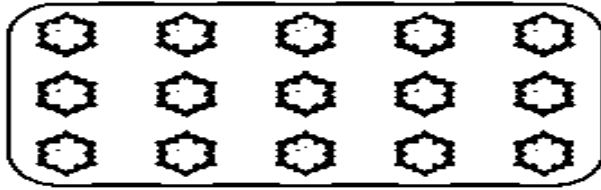

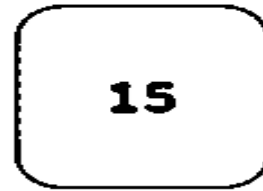

Q1. Write 1 to 20: -

T	O		T	O
	1		1	1
	•		•	•
	•		•	•
	•		•	•
	•		•	•
	•		•	•
	•		•	•
	•		•	•
	•		•	•
•	•		•	•

Q2. Count the pictures in each row and write the correct number: -

Q3. Count the picture in each box & match it with correct numbers: -



Q4. Fill in the missing number: -

11		13		
16		18		20

Q5. Colour the triangle labeled with number 18: -

