

ST. THOMAS KINDERGARTEN, SAHIBABAD
MATHS PRACTICE SHEET
CYCLE-III (2024-25)
CLASS-PREP

NAME:- _____

Date:- _____

Q1. Write the number names for the following numbers.

16 _____

20 _____

8 _____

15 _____

Q2. Count backwards and write the missing numbers.

30		28			25	
40			37	36		






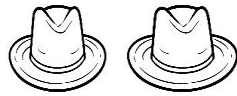
Q3. Add the numbers and write down the correct answer.

$$\begin{array}{r} 5 \\ + 2 \\ \hline \end{array}$$

$$\begin{array}{r} 2 \\ + 4 \\ \hline \end{array}$$

$$\begin{array}{r} 6 \\ + 3 \\ \hline \end{array}$$

Q4. Add the pictures given below and write the correct numbers.

	+		=	<input type="text"/>
	+		=	<input type="text"/>
	+		=	<input type="text"/>

Q5. Write the number that comes before the given number.

<input type="text"/>	34
----------------------	-----------

<input type="text"/>	82
----------------------	-----------

<input type="text"/>	61
----------------------	-----------

<input type="text"/>	53
----------------------	-----------