

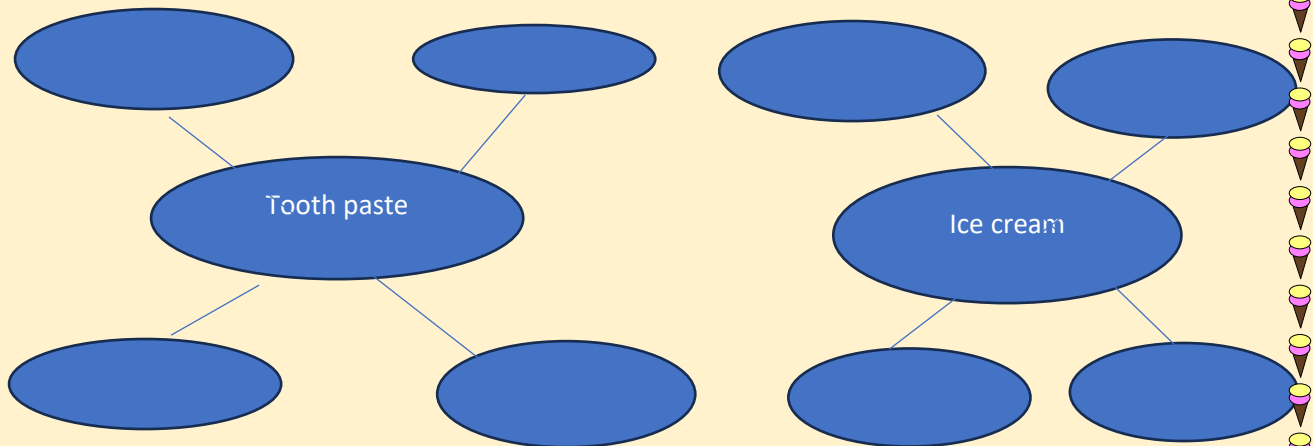
ST. THOMAS SCHOOL, SAHIBABAD
HOLIDAYS' HOME WORK 2024-25
CLASS III

General Instructions-

1. Take a printout of holidays' homework and complete it.
2. Do writing and reading practice during holidays.
3. Learn and revise all the work done in the class.

ENGLISH:

1. Write proper nouns (special names) for the following common nouns.



2. Activity: Read any English Newspaper and find 10 adjectives. Use them in sentences of your own and write them in the space given.



3. Reading story books enhances language and vocabulary. Make a habit of reading one story Everyday.

1. 'परिधि' पाठ्यपुस्तक के पाठ-१ एवं पाठ-२ के प्रश्नोत्तर और शब्दार्थ याद करें ।

2. 'आधारशिला' पुस्तक से 'लिंग', 'वचन', 'पर्यायवाची' एवं 'विलोम' इन सभी पाठों में से 1 से 20 तक याद करें ।

3. रचनात्मक गतिविधि 1 –भारत के विभिन्न राज्यों (कोई 7 से 10 राज्यों) के नाम लिखें एवं राज्यों के नाम के सामने वहाँ के प्रसिद्ध व्यंजनों/प्रसिद्ध भोजन के चित्र चिपकाएँ /बनाएँ। साथ ही व्यंजनों के नाम भी लिखें ।





4.

रचनात्मक गतिविधि 2 – जल, ज़मीन और आकाश में चलने वाले तीन-तीन वाहनों के चित्र चिपकाकर/बनाकर उनके नाम लिखिए ।

MATHS

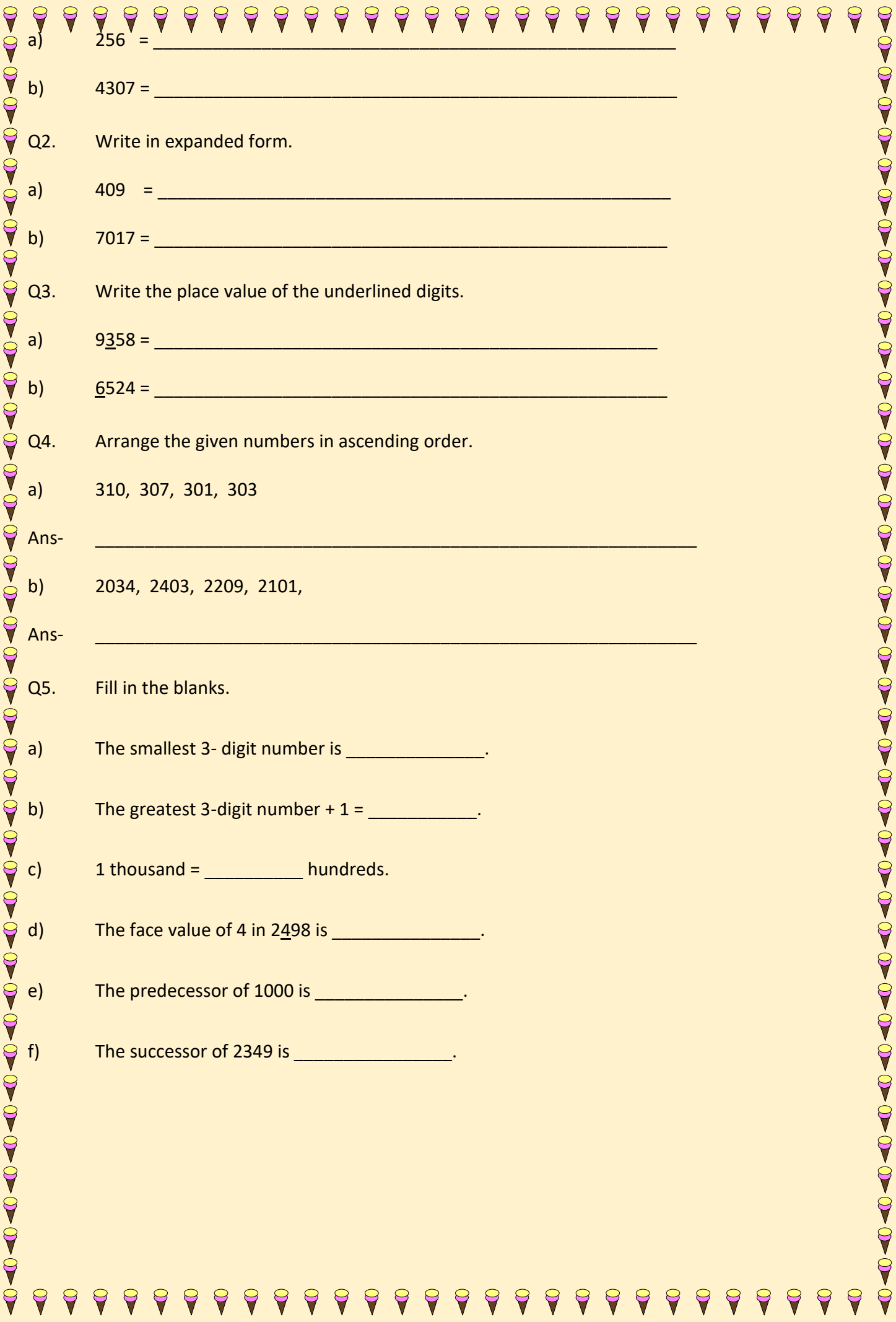
1. Find the line of symmetry of the letters B, M, C, V, H by paper folding and paste them.

2. Write numbers inside the petals so that the numbers in each petal add up to 100.



WORKSHEET

Q1. Write the number names for the given numbers.



a) $256 =$ _____

b) $4307 =$ _____

Q2. Write in expanded form.

a) $409 =$ _____

b) $7017 =$ _____

Q3. Write the place value of the underlined digits.

a) $\underline{9}358 =$ _____

b) $\underline{6}524 =$ _____

Q4. Arrange the given numbers in ascending order.

a) 310, 307, 301, 303

Ans- _____

b) 2034, 2403, 2209, 2101,

Ans- _____

Q5. Fill in the blanks.

a) The smallest 3- digit number is _____.

b) The greatest 3-digit number + 1 = _____.

c) 1 thousand = _____ hundreds.

d) The face value of 4 in $2\underline{4}98$ is _____.

e) The predecessor of 1000 is _____.

f) The successor of 2349 is _____.

EVS

Draw or paste any five road safety signs in the space given below-

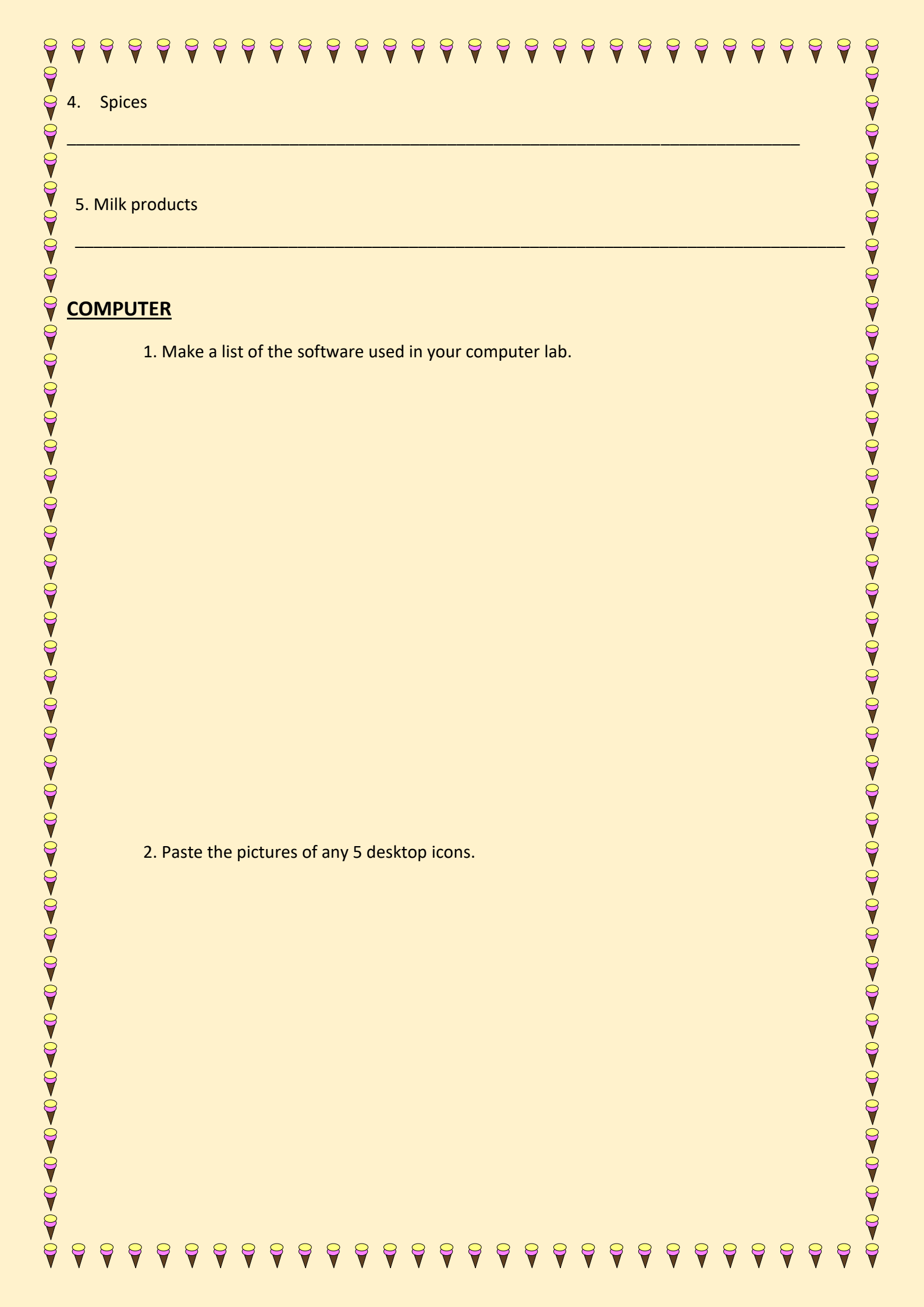


Give examples of the following (any three):

1. Body building foods

2. Protective foods

3. Energy giving foods



4. Spices

5. Milk products

COMPUTER

1. Make a list of the software used in your computer lab.


2. Paste the pictures of any 5 desktop icons.



GENERAL KNOWELGE

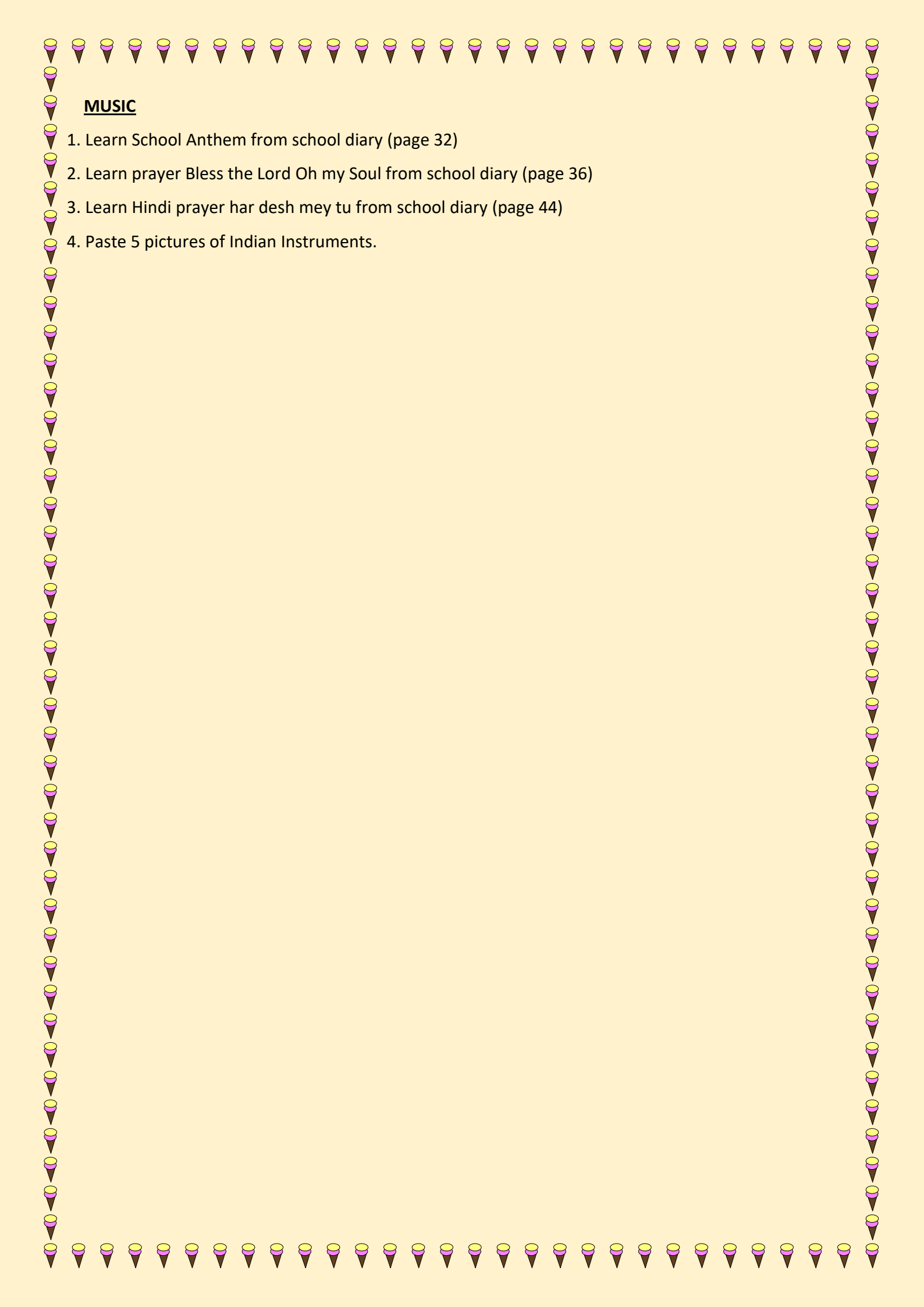
1 Write 10 similes along with pictures.

2. Paste the pictures of 5 different sports played in India along with their names

A decorative border of ice cream cones surrounds the page. The cones are arranged in a rectangular frame, with each cone having a yellow top, a pink middle, and a brown bottom. The top edge has 20 cones, the bottom edge has 20 cones, and the left and right sides each have 20 cones.

VALUE EDUCATION

Draw a beautiful Scenery showing God's creation.

A decorative border of ice cream cones surrounds the page. The cones are arranged in a rectangular frame, with the top and bottom edges being solid lines of cones. The left and right edges are formed by cones pointing downwards, creating a scalloped effect.

MUSIC

1. Learn School Anthem from school diary (page 32)
2. Learn prayer Bless the Lord Oh my Soul from school diary (page 36)
3. Learn Hindi prayer har desh mey tu from school diary (page 44)
4. Paste 5 pictures of Indian Instruments.

ART AND CRAFT:

Cut, join and colour all the parts of animal and paste them.

